

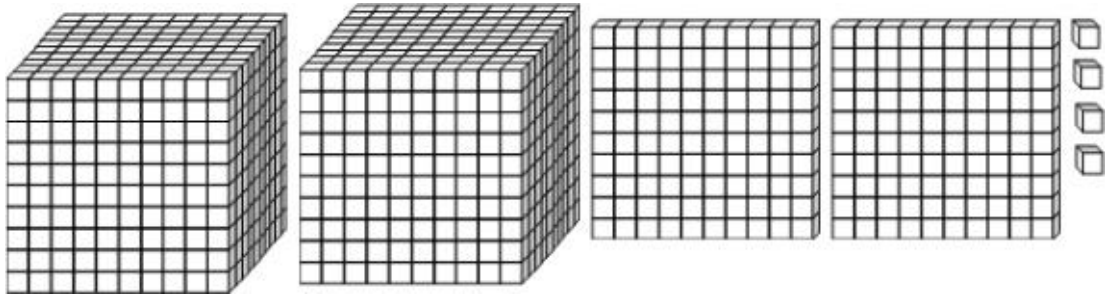
1 **Which shows "four hundred eighty thousand, sixty-five"?**

- A 400,865
- B 480,650
- C 4,008,065
- D 480,065

2 **451,035 people will watch the all-star basketball game next year. What is 451,035 written in words?**

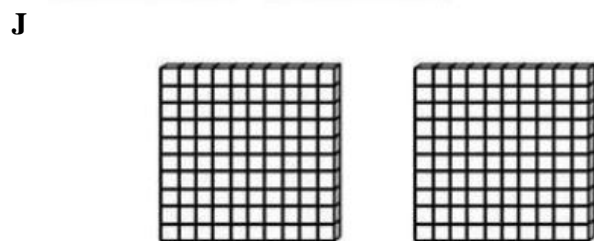
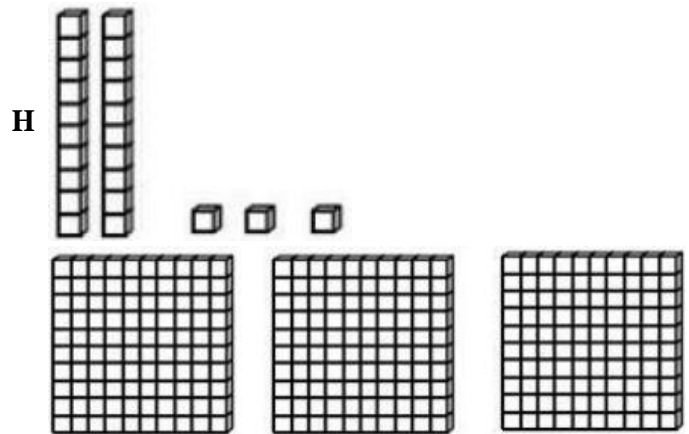

- F Four thousand, fifty-one hundred, thirty-five
- G Four thousands, fifty-one hundreds, thirty-five ones
- H Four hundred fifty-one thousand, thirty-five
- J Fifty-one thousand, thirty-five

3 **Each  in the model has a value of 1. What number is represented by the model shown?**



- A 224
- B 22,004
- C 202,204
- D 2,204

- 4 Each  in the model has a value of 1. Which model represents the value of the 5 in 247,695?



- 5 Which number has a 7 in the hundred thousands place?

- A 745,243
- B 927,643
- C 845,723
- D 975,243

- 6 In April, there were 269,034 eggs sold for the holiday. What is the value of the 6 in 269,034?

- F 60,000
- G 6,000
- H 600
- J 60

- 7 Which shows "five hundred seventy-two thousand, sixty-eight"?

- A 507,268
- B 572,680
- C 572,068
- D 5,072,068

8 Which number has an 8 in the tens place?

F 285,374

G 825,743

H 145,283

J 548,267

9 The Fireworks Company sold 239,407 cases of fireworks for the Fourth of July celebration. What is 239,407 written in words?

A Two hundred thirty-nine thousand, four hundred seven

B Two hundred thirty, forty-seven

C Two hundred thirty thousand, four hundred seven

D Two hundred nine thousand, four hundred seven

10 Which digit of this number is in the hundreds place?

5,769

F 7

G 5

H 6

J 9

11 Last month, 104,629 people went to the circus. What is the value of the 6 in 104,629?



A 6,000

B 6

C 600

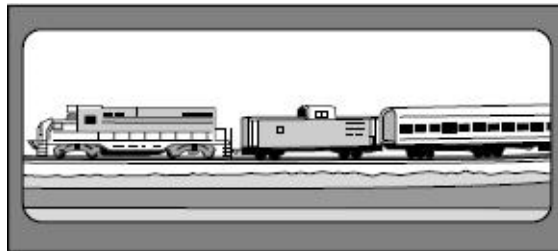
D 60

- 12 **The basketball team scored 2,117 points for the season. What is 2,117 rounded to the nearest thousand?**
- F 2,000
 - G 3,000
 - H 2,100
 - J 1,000

- 13 **The third grade class sold 232 key chains for a school project. To the nearest hundred, about how many key chains did they sell?**
- A 220
 - B 200
 - C 300
 - D 230

- 14 **There were 3,692 tickets sold for the concert. What is 3,692 rounded to the nearest thousand?**
- F 3,700
 - G 4,000
 - H 3,000
 - J 2,000

- 15 **Ellen counted 66 railroad cars in a train.**



What is 66 rounded to the nearest ten?

- A 80
- B 70
- C 50
- D 60

- 16 For the month of November 4,109 pumpkins were sold to make pumpkin pies. What is 4,109 rounded to the nearest ten?
- F 4,120
 - G 4,000
 - H 4,130
 - J 4,110

- 17 Sarah has a bag of marbles for a game at her birthday party. The bag contains 54 blue marbles, 45 yellow marbles, and 47 red marbles. Which statement is true?
- A $45 > 54$
 - B $47 = 45$
 - C $54 < 45$
 - D $47 < 54$

- 18 Which number is LESS THAN 8,243 ?
- F 9,042
 - G 8,029
 - H 9,130
 - J 8,541

- 19 The table shows the number of each color of marble that is in a bag.

Number of Marbles in Bag

Color	Number
Red	15
Yellow	9
Orange	10
Blue	13

Which color marble was sold more than the blue marbles?

- A Orange
 - B Red
 - C Blue
 - D Yellow
- 20 Which statement is true?
- F 754 is greater than 654
 - G 305 is greater than 350
 - H 626 is less than 599
 - J 313 is less than 300

